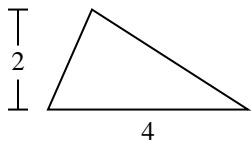


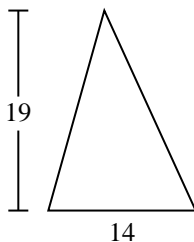


Find the area of the triangle. Round your answer to the nearest 10th.

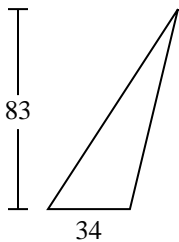
1)



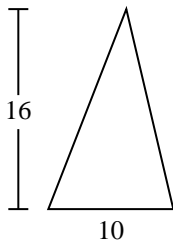
2)



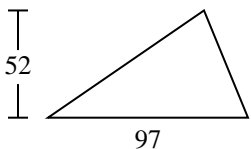
3)



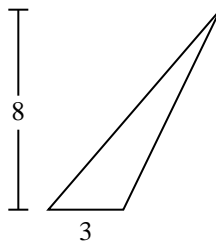
4)



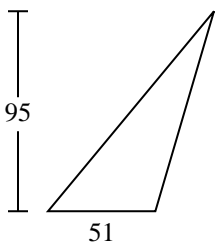
5)



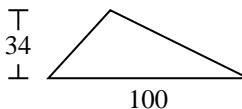
6)



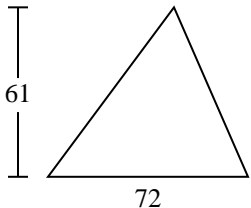
7)



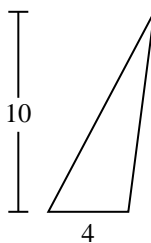
8)



9)



10)



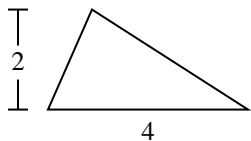
Answers

- 1. _____
- 2. _____
- 3. _____
- 4. _____
- 5. _____
- 6. _____
- 7. _____
- 8. _____
- 9. _____
- 10. _____

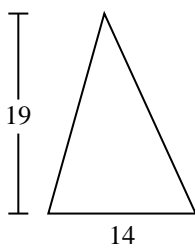


Find the area of the triangle. Round your answer to the nearest 10th.

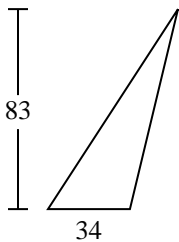
1)



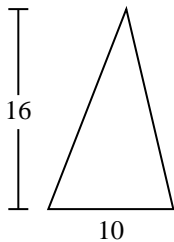
2)



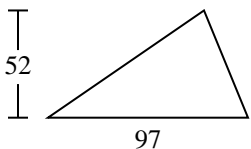
3)



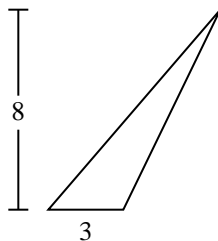
4)



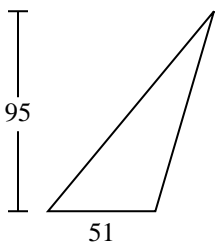
5)



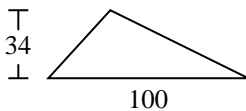
6)



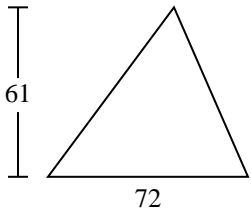
7)



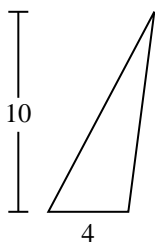
8)



9)



10)



Answers

1. 4

2. 133

3. 1,411

4. 80

5. 2,522

6. 12

7. 2,422.5

8. 1,700

9. 2,196

10. 20



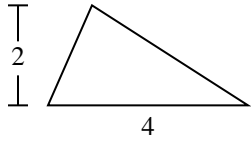
Find the area of the triangle. Round your answer to the nearest 10th.

Answers

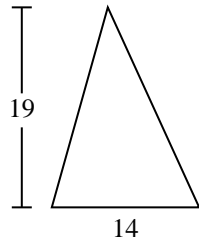
| | | | | |
|-------|---------|-------|-------|-------|
| 133 | 4 | 1,411 | 2,522 | 2,196 |
| 1,700 | 2,422.5 | 80 | 12 | |

1. _____
2. _____
3. _____
4. _____
5. _____
6. _____
7. _____
8. _____
9. _____

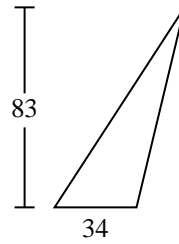
1)



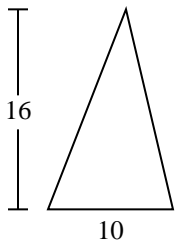
2)



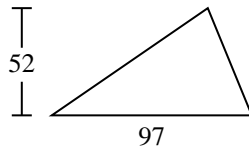
3)



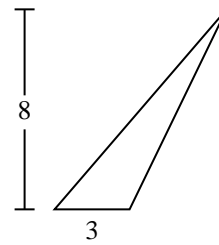
4)



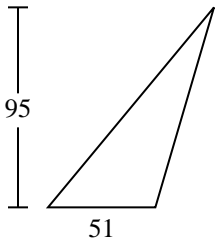
5)



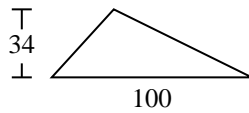
6)



7)



8)



9)

